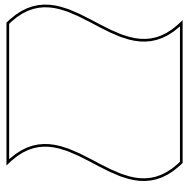
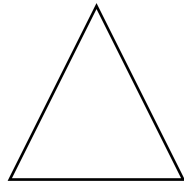


# NVR: Odd One Out


In these questions, four of the figures are alike in some way. You need to choose the figure that is most unlike the others. Take a look at this example:



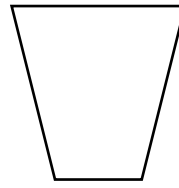
A




B



C



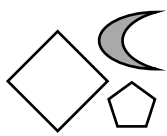
D



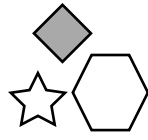
E

The correct answer to this question is B. This is because all of the other shapes have four sides.

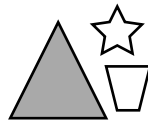
1.



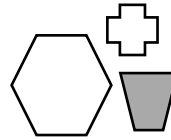
A



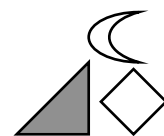
B



C

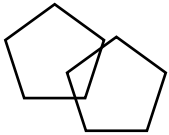


D

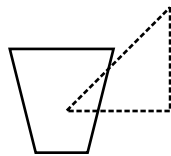


E

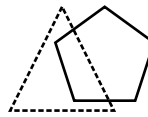
2.



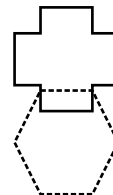
A



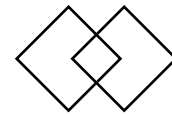
B



C




D

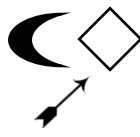


E

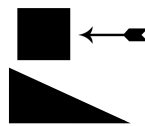
3.



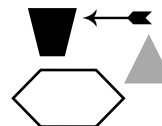
A



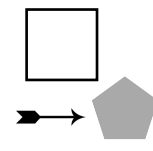
B



C



D

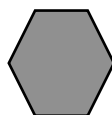


E


4.



A




B



C



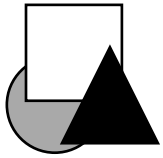
D



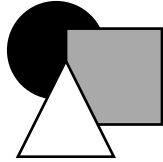
E

NVR: Odd One Out Continued

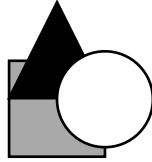
5.



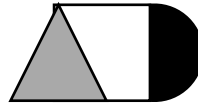
A



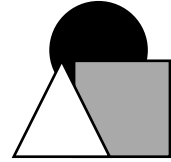
B



C

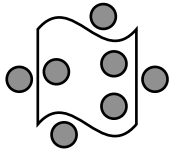


D

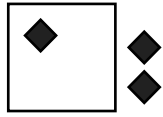


E

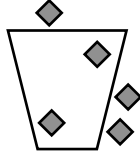
6.



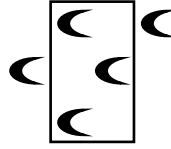
A



B



C



D



E

7.



A



B



C

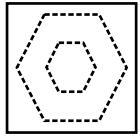


D

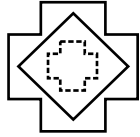


E

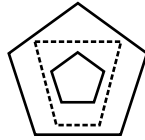
8.



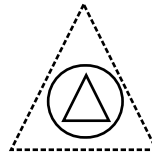
A



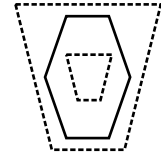
B



C

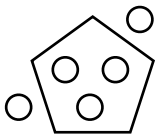


D

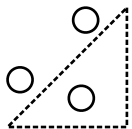


E

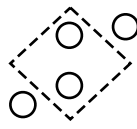
9.



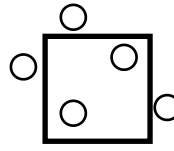
A



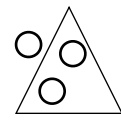
B



C

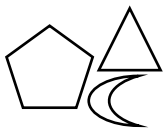


D

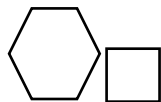


E

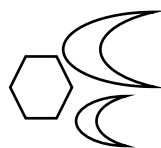
10.




A



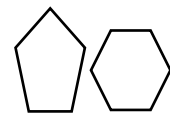
B



C



D



E

1. **E** (in all other figures, the shape with the least number of sides is always grey)
2. **B** (in all other figures, the shape made by the overlap always has four sides)
3. **E** (in all other figures, the arrow points to the four-sided shape)
4. **C** (in all other figures, the shapes have an even number of sides)
5. **C** (in all other figures, the triangle is layered on top, the square is in the middle, and the circle is at the bottom)
6. **D** (in all other figures, there is one less small shape inside the main shape than the number outside the main shape)
7. **B** (all other figures are a rotation of the same shape; B is a reflection)
8. **A** (in all other figures, the innermost shape is the same shape as the outermost shape)
9. **D** (in all other figures, there are the same number of dots as sides on the main shape)
10. **E** (in all other figures, the shapes have 10 sides altogether)