



Mixed Maths Test

Answer the following questions by writing your answer in the space provided. Allow yourself 10 minutes to complete these questions - make sure you work quickly and ACCURATELY!

Score	%


1. Lucy borrows £24 from her brother. She promises to pay him back £2 a week. How many weeks will it take her to pay him back completely?

_____ weeks

6. Circle the numbers below that are NOT part of the 6 times table.

66 28 36 18 72 12 32

2. Look at the shape below. What kind of shape is it?



7. Subtract 143 from 372.

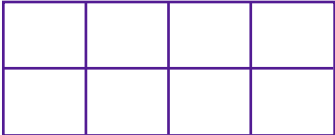
3. One juice bottle contains 375ml of liquid. How many ml will there be in 4 bottles altogether?

_____ ml

8. Jim and Marie set off on a trip to a theme park. They left their house at 9.30am and returned home at 4.10pm. How long did their visit last?


_____ hours _____ minutes

4. Look at the shape below. If I shaded in $\frac{1}{4}$ of it, how many squares would NOT be shaded?



9. Helen thinks of a number. She multiplies it by 5 and adds 7. The answer is 47. What number did she start with?

5. What is the perimeter of this shape?



_____ m

10. Emma walks into a shop and buys a cake for £1.10 and a magazine for £2.35. How much change will she be given from a £5 note?

£ _____

Word Matching

Choose a word from the box at the bottom of the page to make each sentence correct.
The first one has been done for you. Use a dictionary if needed and try to learn the meanings
of any words that are new to you!

1. The girl was happy when she got every answer **correct** in her test.



2. The tennis player had a _____ during the match because he was not playing well.

3. His mother had a huge feeling of _____ when her son accepted his award.



4. The puppy was _____ at first, but he soon got used to his new family.

5. You should always check your work _____ before you hand it in.

6. The _____ toddler refused to eat her dinner.

7. The _____ spent a long time in his workshop building a table.

8. The author created a _____ who was wise and kind.

9. Pizza is a _____ dish from Italy.



10. Always be _____ - it's rude not to say please and thank you.

11. The boy became _____ when he could not remember his times tables!

12. Beetroot, carrots and swede are all _____ vegetables.

pride	carpenter	stubborn	character	frustrated	root
traditional	timid	carefully	polite	correct	tantrum

Maths Answers

1. 12 weeks
2. cylinder
3. 1500ml
4. 6
5. 30m
6. 28, 32
7. 229
8. 6 hours, 40 minutes
9. 8
10. £1.55

English Answers

1. correct
2. tantrum
3. pride
4. timid
5. carefully
6. stubborn
7. carpenter
8. character
9. traditional
10. polite
11. frustrated
12. root